

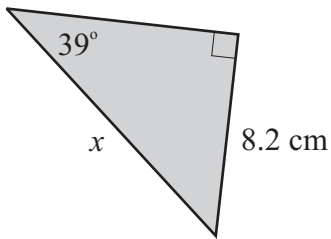
Master Maths 10 Worksheet 59
Trigonometry 3 - Finding Side Lengths 1

59

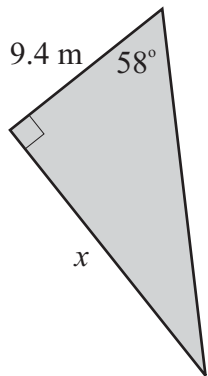
Name: _____

Find the unknown side lengths in the following triangles.
Give answers correct to one decimal place.

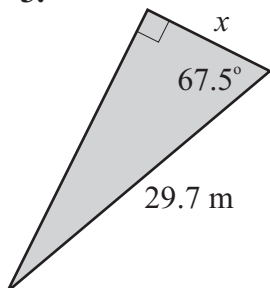
1.



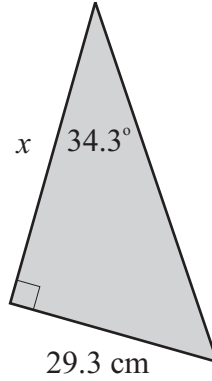
2.



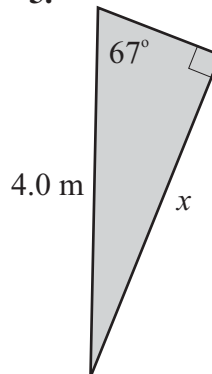
3.



4.



5.



6.

